

NUMBERS FROM TWENTY-ONE TO FIFTY

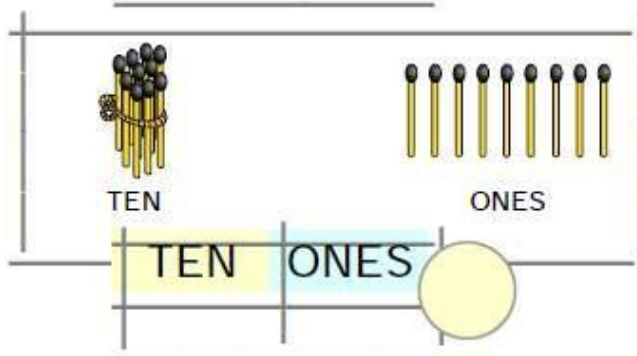
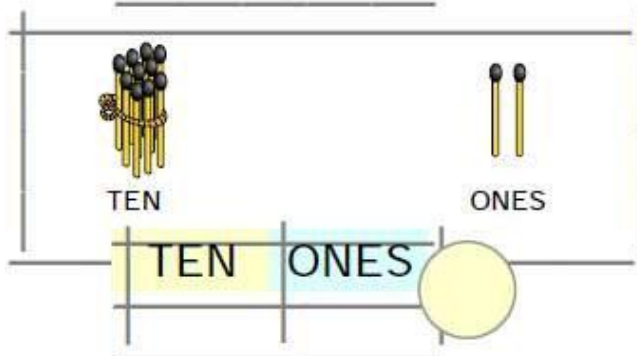
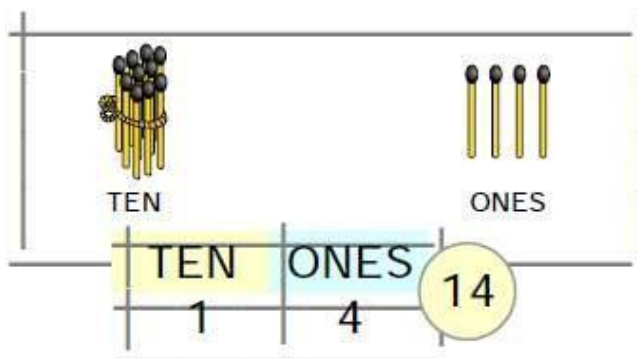
Question 1:

Fill in the blanks

Answer:

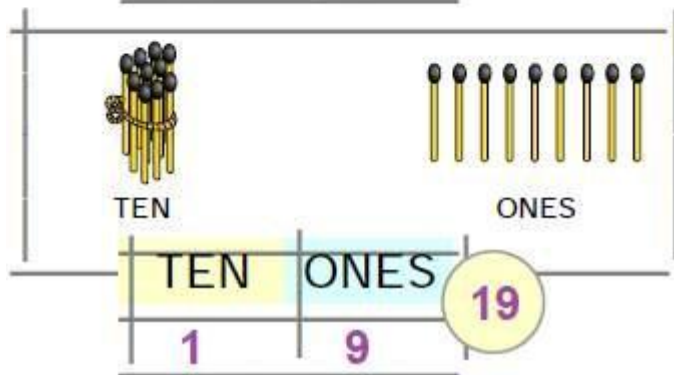
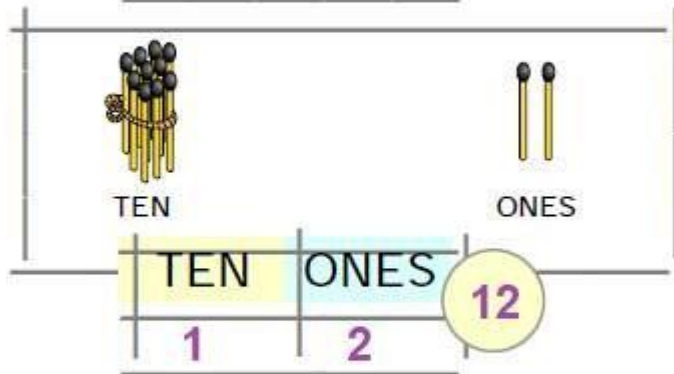
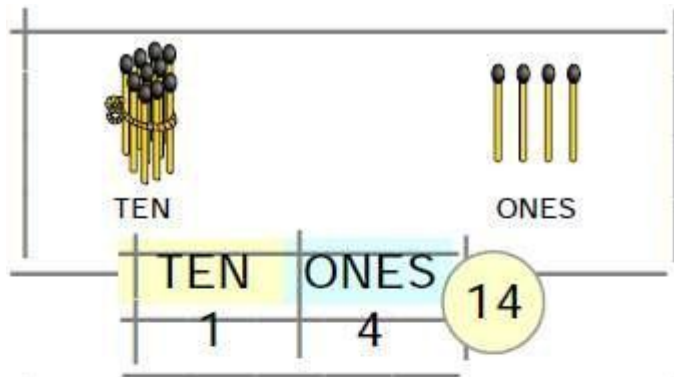
NCERT Solutions Class 1 Maths – Chapter 8
Numbers from Twenty-one to Fifty**Question 2:**

Write the number.



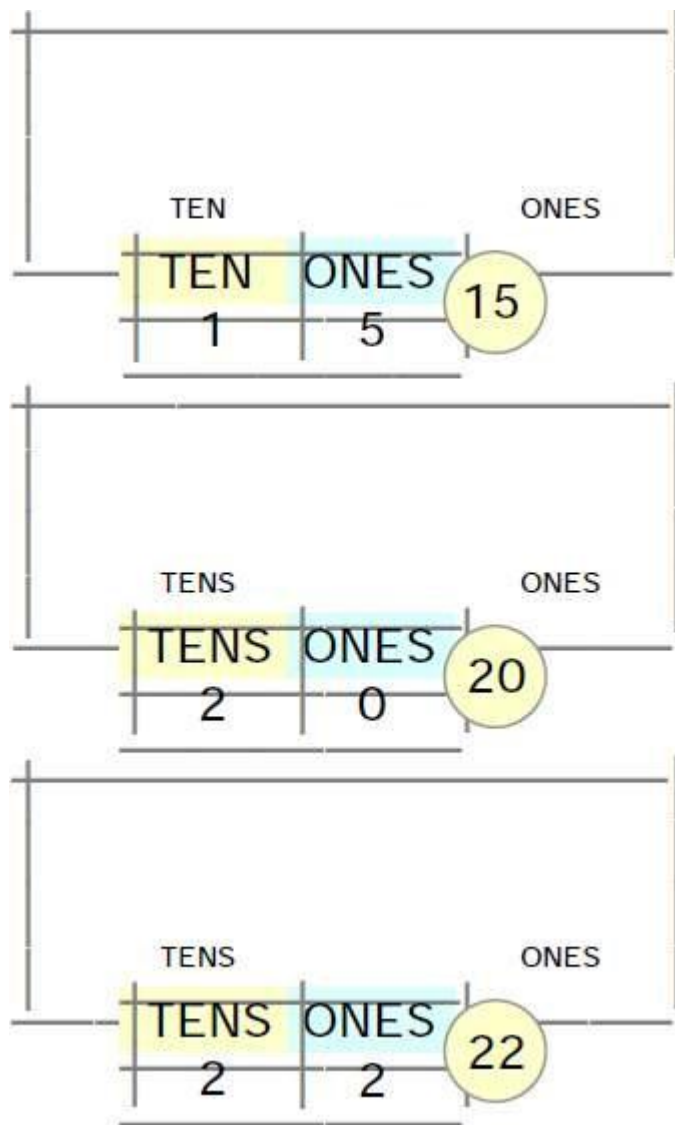
NCERT Solutions Class 1 Maths – Chapter 8
Numbers from Twenty-one to Fifty

Answer:



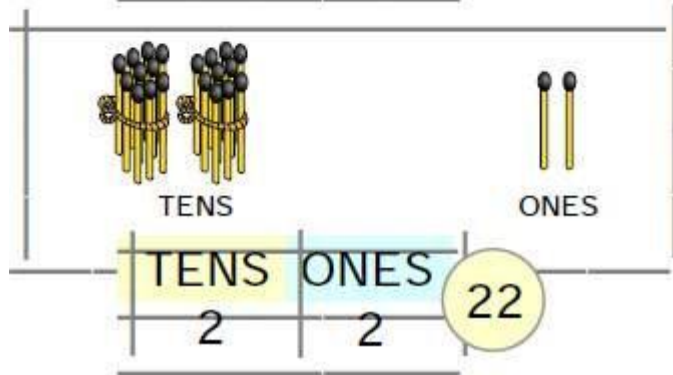
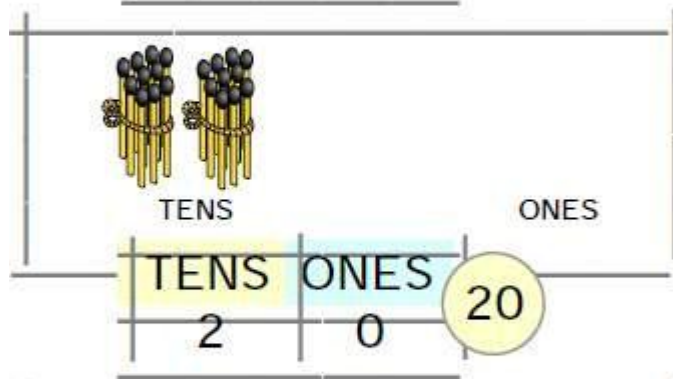
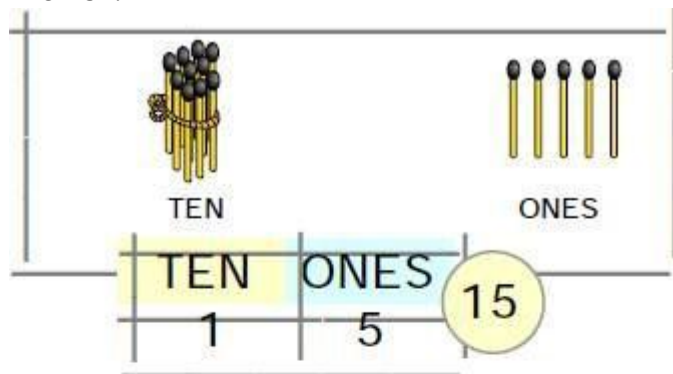
NCERT Solutions Class 1 Maths – Chapter 8
Numbers from Twenty-one to Fifty**Question 3:**

Draw the bundles and ones.



NCERT Solutions Class 1 Maths – Chapter 8
Numbers from Twenty-one to Fifty

Answer:



NCERT Solutions Class 1 Maths – Chapter 8
Numbers from Twenty-one to Fifty

Write the number

Question 4:

TENS ONES

TENS	ONES	25
2	5	

TENS ONES

TENS	ONES	33
3	3	

TENS ONES

TENS	ONES	
2	3	

TENS ONES

TENS	ONES	
4	2	

TENS ONES

TENS	ONES	

TENS ONES

TENS	ONES	

TENS ONES

TENS	ONES	

TENS ONES

TENS	ONES	

TENS ONES

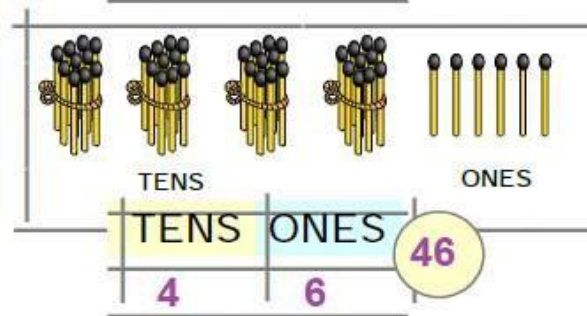
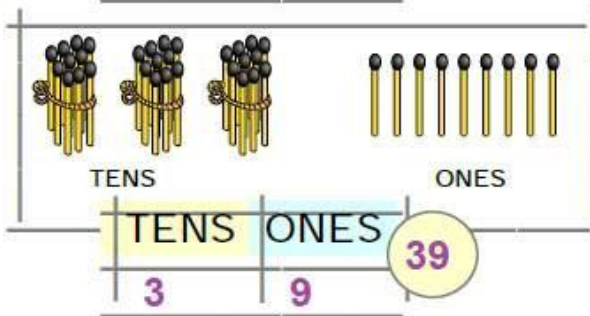
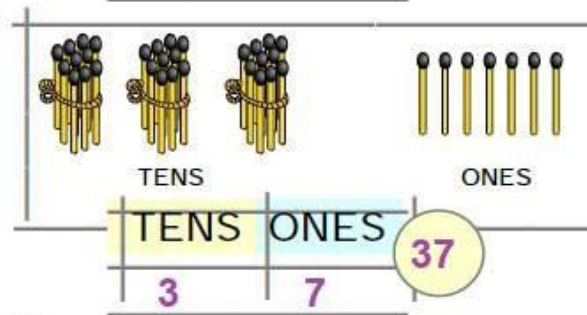
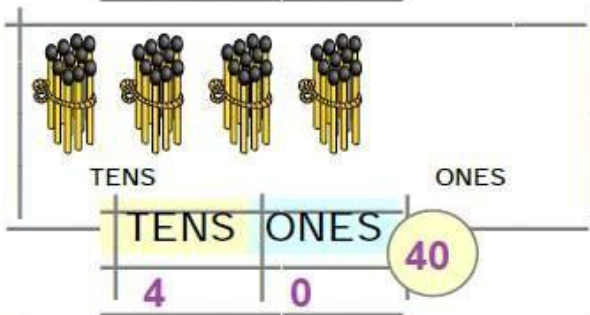
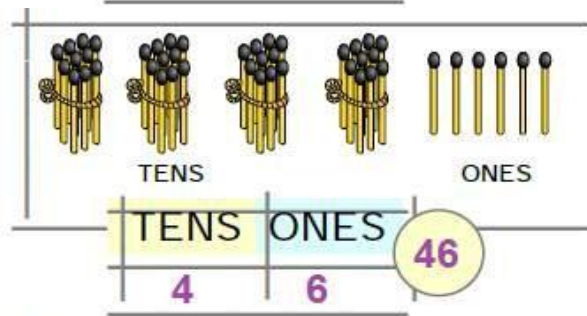
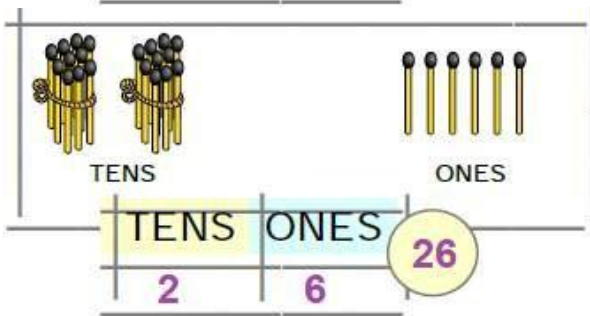
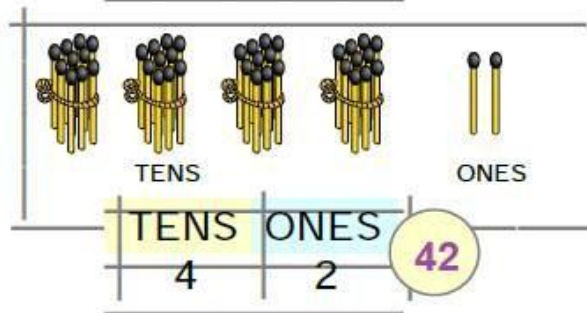
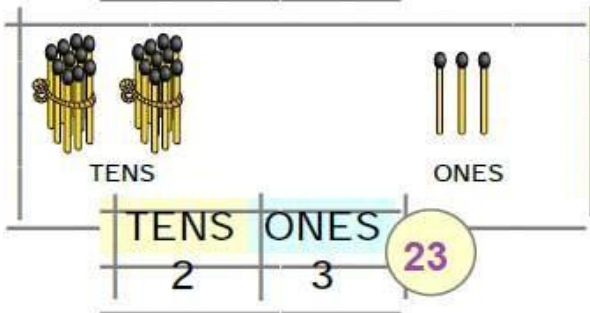
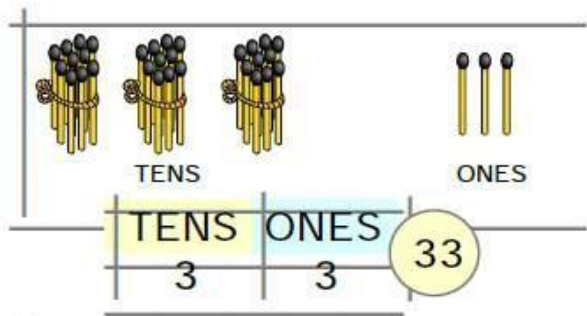
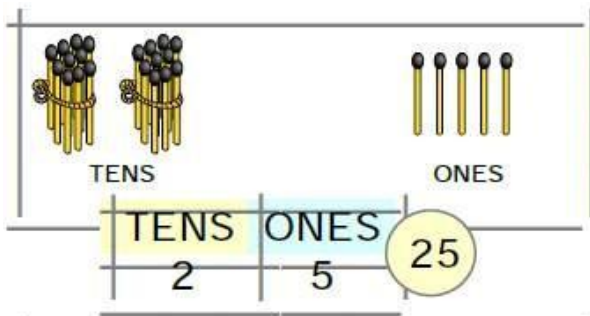
TENS	ONES	

TENS ONES

TENS	ONES	

NCERT Solutions Class 1 Maths – Chapter 8
Numbers from Twenty-one to Fifty

Answer:



NCERT Solutions Class 1 Maths – Chapter 8
Numbers from Twenty-one to Fifty

Question 5:

Fill in the blanks


21

2 TENS 1 ONE


22

2 TENS 2 ONES


23


2 TENS 3 ONES



2 TENS 4 ONES



2 TENS 5 ONES




2 TENS 6 ONES


27

2 TENS 7 ONES


28

2 TENS 8 ONES


29

2 TENS 9 ONES


30

2 TENS 1 TEN


31

3 TENS 1 ONE



3 TENS 2 ONES



3 TENS 3 ONES




3 TENS 4 ONES



3 TENS 5 ONES


36

3 TENS 6 ONES



3 TENS 7 ONES


38

3 TENS 8 ONES


39

3 TENS 9 ONES


40

3 TENS 1 TEN

NCERT Solutions Class 1 Maths – Chapter 8 Numbers from Twenty-one to Fifty

Answer:


21

2 TENS 1 ONE


22

2 TENS 2 ONES


23


2 TENS 3 ONES


24


2 TENS 4 ONES


25


2 TENS 5 ONES


26


2 TENS 6 ONES


27


2 TENS 7 ONES


28

2 TENS 8 ONES


29

2 TENS 9 ONES


30

2 TENS 1 TEN


31

3 TENS 1 ONE


32

3 TENS 2 ONES


33


3 TENS 3 ONES


34


3 TENS 4 ONES


35


3 TENS 5 ONES


36


3 TENS 6 ONES


37

3 TENS 7 ONES


38

3 TENS 8 ONES


39

3 TENS 9 ONES


40

3 TENS 1 TEN

NCERT Solutions Class 1 Maths – Chapter 8
Numbers from Twenty-one to Fifty

Question 6:

Fill in the blanks.



4 TENS



1 ONE

41



4 TENS

2 ONES



4 TENS



3 ONES

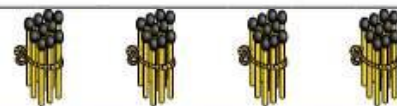
43



4 TENS

5 ONES

45



4 TENS

6 ONES



4 TENS



7 ONES

47



4 TENS

8 ONES

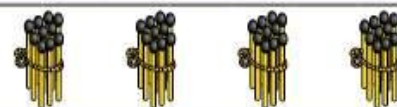
48



4 TENS

9 ONES

49



4 TENS



1 Ten

50

NCERT Solutions Class 1 Maths – Chapter 8
Numbers from Twenty-one to Fifty

Answer:



4 TENS



1 ONE

41



4 TENS



2 ONES

42



4 TENS



3 ONES

43



4 TENS



4 ONES

44



4 TENS



5 ONES

45



4 TENS



6 ONES

46

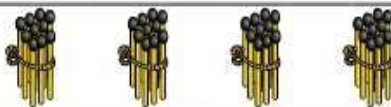


4 TENS



7 ONES

47



4 TENS



8 ONES

48



4 TENS



9 ONES

49



4 TENS



1 Ten

50

NCERT Solutions Class 1 Maths – Chapter 8
Numbers from Twenty-one to Fifty**Question 7:**

Write the missing numbers

1	2	3	4	5	6	7	8	9	10
11		13			16				
	22					27			
							38		
		43						49	

Answer:

1	2	3	4	5	6	7	8	9	10
11	12	13	14	15	16	17	18	19	20
21	22	23	24	25	26	27	28	29	30
31	32	33	34	35	36	37	38	39	40
41	42	43	44	45	46	47	48	49	50