

# CBSE Class 10 Maths Paper Solution

CBSE Class X Math Paper 2014

**Q1.** The first three terms of an AP are  $3y-1$ ,  $3y+5$  and  $5y+1$ , respectively.

We need to find the value of  $y$ .

We know that if  $a$ ,  $b$  and  $c$  are in AP, then:

$$b - a = c - b \Rightarrow 2b = a + c$$

$$\therefore 2(3y+5) = 3y - 1 + 5y + 1$$

$$\Rightarrow 6y + 10 = 8y$$

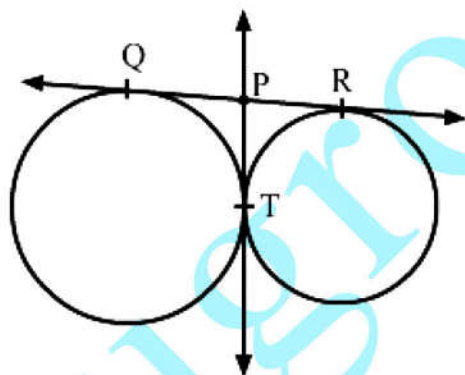
$$\Rightarrow 10 = 8y - 6y$$

$$\Rightarrow 2y = 10$$

$$\Rightarrow y = 5$$

Hence the correct option is C.

**Q2.**



It is known that the length of the tangents drawn from an external point to a circle is equal.

$$\therefore QP = PT = 3.8 \text{ cm} \quad \dots (1)$$

$$PR = PT = 3.8 \text{ cm} \quad \dots (2)$$

From equations (1) and (2), we get:

$$QP = PR = 3.8 \text{ cm}$$

$$\begin{aligned} \text{Now, } QR &= QP + PR \\ &= 3.8 \text{ cm} + 3.8 \text{ cm} \\ &= 7.6 \text{ cm} \end{aligned}$$

Hence, the correct option is B.

**Q3.** Given:  $\angle QPR = 46^\circ$

PQ and PR are tangents.

Therefore, the radius drawn to these tangents will be perpendicular to the tangents.

So, we have  $OQ \perp PQ$  and  $OR \perp RP$ .

$\Rightarrow \angle OQP = \angle ORP = 90^\circ$

So, in quadrilateral PQOR, we have

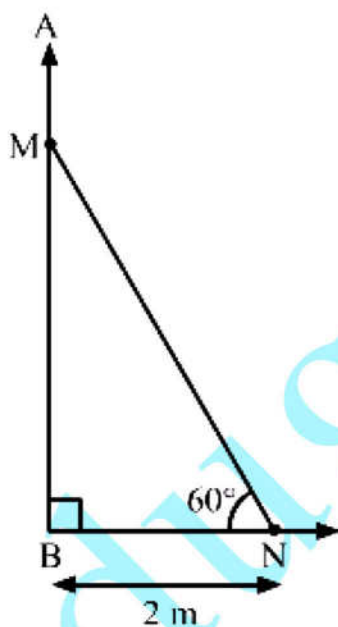
$\angle OQP + \angle QPR + \angle PRO + \angle ROQ = 360^\circ$

$\Rightarrow 90^\circ + 46^\circ + 90^\circ + \angle ROQ = 360^\circ$

$\Rightarrow \angle ROQ = 360^\circ - 226^\circ = 134^\circ$

Hence, the correct option is B.

Q4.



In the figure, MN is the length of the ladder, which is placed against the wall AB and makes an angle of  $60^\circ$  with the ground.

The foot of the ladder is at N, which is 2 m away from the wall.

$\therefore BN = 2 \text{ m}$

In right-angled triangle MNB:

Hence, the correct option is B.

**Q3.** Given:  $\angle QPR = 46^\circ$

PQ and PR are tangents.

Therefore, the radius drawn to these tangents will be perpendicular to the tangents.

So, we have  $OQ \perp PQ$  and  $OR \perp RP$ .

$\Rightarrow \angle OQP = \angle ORP = 90^\circ$

So, in quadrilateral PQOR, we have

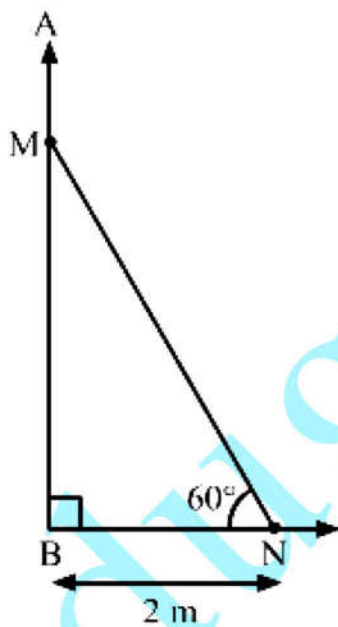
$\angle OQP + \angle QPR + \angle PRO + \angle ROQ = 360^\circ$

$\Rightarrow 90^\circ + 46^\circ + 90^\circ + \angle ROQ = 360^\circ$

$\Rightarrow \angle ROQ = 360^\circ - 226^\circ = 134^\circ$

Hence, the correct option is B.

Q4.



In the figure, MN is the length of the ladder, which is placed against the wall AB and makes an angle of  $60^\circ$  with the ground.

The foot of the ladder is at N, which is 2 m away from the wall.

$\therefore BN = 2 \text{ m}$

In right-angled triangle MNB:

Hence, the correct option is C.

**Q7.** It is given that the three points  $A(x, 2)$ ,  $B(-3, -4)$  and  $C(7, -5)$  are collinear.

$$\therefore \text{Area of } \triangle ABC = 0$$

$$\Rightarrow \frac{1}{2} [x_1(y_2 - y_3) + x_2(y_3 - y_1) + x_3(y_1 - y_2)] = 0$$

Here,  $x_1 = x$ ,  $y_1 = 2$ ,  $x_2 = -3$ ,  $y_2 = -4$ , and  $x_3 = 7$ ,  $y_3 = -5$

$$\Rightarrow x[-4 - (-5)] - 3(-5 - 2) + 7[2 - (-4)] = 0$$

$$\Rightarrow x(-4 + 5) - 3(-5 - 2) + 7(2 + 4) = 0$$

$$\Rightarrow x - 3 \times (-7) + 7 \times 6 = 0$$

$$\Rightarrow x + 21 + 42 = 0$$

$$\Rightarrow x + 63 = 0$$

$$\Rightarrow x = -63$$

Thus, the value of  $x$  is  $-63$ .

Hence, the correct option is A.

**Q8.** Let  $r$  and  $h$  be the radius and the height of the cylinder, respectively.

Given: Diameter of the cylinder = 4 cm

$\therefore$  Radius of the cylinder,  $r = 2$  cm

Height of the cylinder,  $h = 45$  cm

$$\text{Volume of the solid cylinder} = \pi r^2 h = \pi \times (2)^2 \times 45 \text{ cm}^3 = 180\pi \text{ cm}^3$$

Suppose the radius of each sphere be  $R$  cm.

Diameter of the sphere = 6 cm

$\therefore$  Radius of the sphere,  $R = 3$  cm

Let  $n$  be the number of solids formed by melting the solid metallic cylinder.

$$\therefore n \times \text{Volume of the solid spheres} = \text{Volume of the solid cylinder}$$

$$\Rightarrow n \times \frac{4}{3} \pi R^3 = 180\pi$$

$$\Rightarrow n \times \frac{4}{3} \pi 3^3 = 180\pi$$

$$\Rightarrow n = \frac{180 \times 3}{4 \times 27} = 5$$

Thus, the number of solid spheres that can be formed is 5.

Hence, the correct option is B.

**Q9.** We have:  $2x^2 + ax - a^2 = 0$

Comparing the given equation with the standard quadratic equation ( $ax^2 + bx + c = 0$ ), we get  
 $a = 2$ ,  $b = a$  and  $c = -a^2$

Using the quadratic formula,  $x = \frac{-b \pm \sqrt{b^2 - 4ac}}{2a}$ , we get:

$$\begin{aligned} x &= \frac{-a \pm \sqrt{a^2 - 4 \times 2 \times (-a)^2}}{2 \times 2} \\ &= \frac{-a \pm \sqrt{9a^2}}{4} \\ &= \frac{-a \pm 3a}{4} \end{aligned}$$

$$\Rightarrow x = \frac{-a + 3a}{4} = \frac{a}{2} \text{ or } x = \frac{a - 3a}{4} = -a$$

So, the solutions of the given quadratic equation are  $x = \frac{a}{2}$  or  $x = -a$ .

**Q10.** Let  $a$  be the first term and  $d$  be the common difference.

Given:  $a = 5$

$$T_n = 45$$

$$S_n = 400$$

We know:

$$T_n = a + (n - 1)d$$

$$\Rightarrow 45 = 5 + (n - 1)d$$

$$\Rightarrow 40 = (n - 1)d \quad \dots\dots\dots(1)$$

$$\text{And } S_n = \frac{n}{2}a + T_n$$

$$\Rightarrow 400 = \frac{n}{2}(5 + 45)$$

$$\Rightarrow \frac{n}{2} = \frac{400}{50}$$

$$\Rightarrow n = 2 \times 8 = 16$$

On substituting  $n = 16$  in (1), we get:

$$40 = (16 - 1)d$$

$$\Rightarrow 40 = (15)d$$

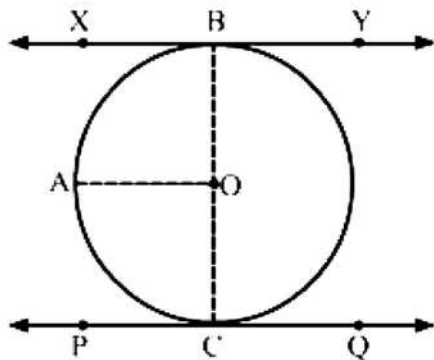
$$\Rightarrow d = \frac{40}{15} = \frac{8}{3}$$

Thus, the common difference is  $\frac{8}{3}$ .

**Q11.** Let  $XBY$  and  $PCQ$  be two parallel tangents to a circle with centre  $O$ .

Construction: Join  $OB$  and  $OC$ .

Draw  $OA \parallel XY$



Now,  $XB \parallel AO$

$$\Rightarrow \angle XBO + \angle AOB = 180^\circ \quad (\text{sum of adjacent interior angles is } 180^\circ)$$

Now,  $\angle XBO = 90^\circ$  (A tangent to a circle is perpendicular to the radius through the point of contact)

$$\Rightarrow 90^\circ + \angle AOB = 180^\circ$$

$$\Rightarrow \angle AOB = 180^\circ - 90^\circ = 90^\circ$$

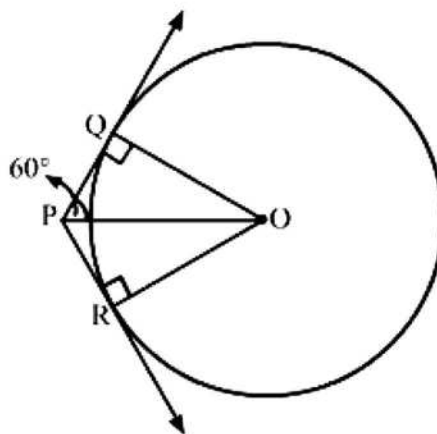
Similarly,  $\angle AOC = 90^\circ$

$$\angle AOB + \angle AOC = 90^\circ + 90^\circ = 180^\circ$$

Hence,  $BOC$  is a straight line passing through  $O$ .

Thus, the line segment joining the points of contact of two parallel tangents of a circle passes through its centre.

**Q12.** Let us draw the circle with extent point P and two tangents PQ and PR.



We know that the radius is perpendicular to the tangent at the point of contact.

$$\therefore \angle OQP = 90^\circ$$

We also know that the tangents drawn to a circle from an external point are equally inclined to the joining the centre to that point.

$$\therefore \angle QPO = 60^\circ$$

Now, in  $\Delta QPO$ :

$$\cos 60^\circ = \frac{PQ}{PO}$$

$$\Rightarrow \frac{1}{2} = \frac{PQ}{PO}$$

$$\Rightarrow 2PQ = PO$$

**Q13.** Rahim tosses two coins simultaneously. The sample space of the experiment is {HH, HT, TH, and TT}.

Total number of outcomes = 4

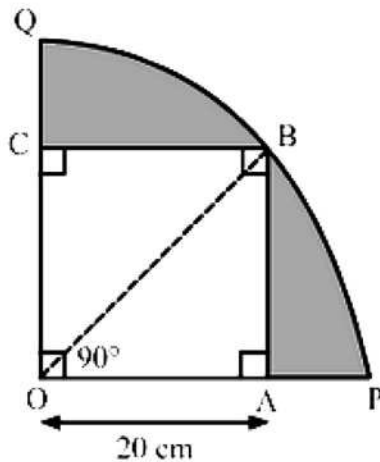
Outcomes in favour of getting at least one tail on tossing the two coins = {HT, TH, TT}

Number of outcomes in favour of getting at least one tail = 3

∴ Probability of getting at least one tail on tossing the two coins

$$= \frac{\text{Number of favourable outcomes}}{\text{Total number of outcomes}} = \frac{3}{4}$$

**Q14.** Let us join OB.



In  $\triangle OAB$ :

$$OB^2 = OA^2 + AB^2 = (20)^2 + (20)^2 = 2 \times (20)^2$$

$$\Rightarrow OB = 20\sqrt{2}$$

Radius of the circle,  $r = 20\sqrt{2}$  cm

$$\text{Area of quadrant OPBQ} = \frac{\theta}{360^\circ} \times \pi r^2$$

$$= \frac{90^\circ}{360^\circ} \times 3.14 \times (20\sqrt{2})^2 \text{ cm}^2$$

$$= \frac{1}{4} \times 3.14 \times 800 \text{ cm}^2$$

$$= 628 \text{ cm}^2$$

$$\text{Area of square OACB} = (\text{Side})^2 = (20)^2 \text{ cm}^2 = 400 \text{ cm}^2$$

∴ Area of the shaded region = Area of quadrant OPBQ – Area of square OACB

$$= (628 - 400) \text{ cm}^2$$

$$= 228 \text{ cm}^2$$



**Q 15.** Given equation:

$$\frac{4}{x} - 3 = \frac{5}{2x+3}; x \neq 0, -\frac{3}{2}$$

$$\frac{4}{x} - 3 = \frac{5}{2x+3}$$

$$\Rightarrow \frac{4-3x}{x} = \frac{5}{2x+3}$$

$$\Rightarrow (4-3x)(2x+3) = 5x$$

$$\Rightarrow -6x^2 + 8x - 9x + 12 = 5x$$

$$\Rightarrow 6x^2 + 6x - 12 = 0$$

$$\Rightarrow x^2 + x - 2 = 0$$

$$\Rightarrow x^2 + 2x - x - 2 = 0$$

$$\Rightarrow (x+2)(x-1) = 0$$

$$\Rightarrow (x+2) = 0 \quad (x-1) = 0$$

$$\Rightarrow x = -2 \text{ or } x = 1$$

Thus, the solution of the given equation is -2 or 1.

**Q16.** Let a be the first term and d be the common difference of the given A.P.

Given:

$$a_7 = \frac{1}{9}$$

$$a_9 = \frac{1}{7}$$

$$a_7 = a + (7-1)d = \frac{1}{9}$$

$$\Rightarrow a + 6d = \frac{1}{9} \quad \dots\dots\dots (1)$$

$$a_9 = a + (9-1)d = \frac{1}{7}$$

$$\Rightarrow a + 8d = \frac{1}{7} \quad \dots\dots\dots (2)$$

Subtracting equation (1) from (2), we get:

$$2d = \frac{2}{63}$$

$$\Rightarrow d = \frac{1}{63}$$

Putting  $d = \frac{1}{63}$  in equation (1), we get:

$$a + \left(6 \times \frac{1}{63}\right) = \frac{1}{9}$$

$$\Rightarrow a = \frac{1}{63}$$

$$\therefore a_{63} = a + (63 - 1)d = \frac{1}{63} + 62 \left(\frac{1}{63}\right) = \frac{63}{63} = 1$$

Thus, the 63<sup>rd</sup> term of the given A.P. is 1.

**Q17.** Follow the given steps to construct the figure.

Step 1

Draw a line BC of 8 cm length.

Step 2

Draw BX perpendicular to BC.

Step 3

Mark an arc at the distance of 6 cm on BX. Mark it as A.

Step 4

Join A and C. Thus,  $\triangle ABC$  is the required triangle.

Step 5

With B as the centre, draw an arc on AC.

Step 6

Draw the bisector of this arc and join it with B. Thus, BD is perpendicular to AC.

Step 7

Now, draw the perpendicular bisector of BD and CD. Take the point of intersection as O.

Step 8

With O as the centre and OB as the radius, draw a circle passing through points B, C and D.

Step 9

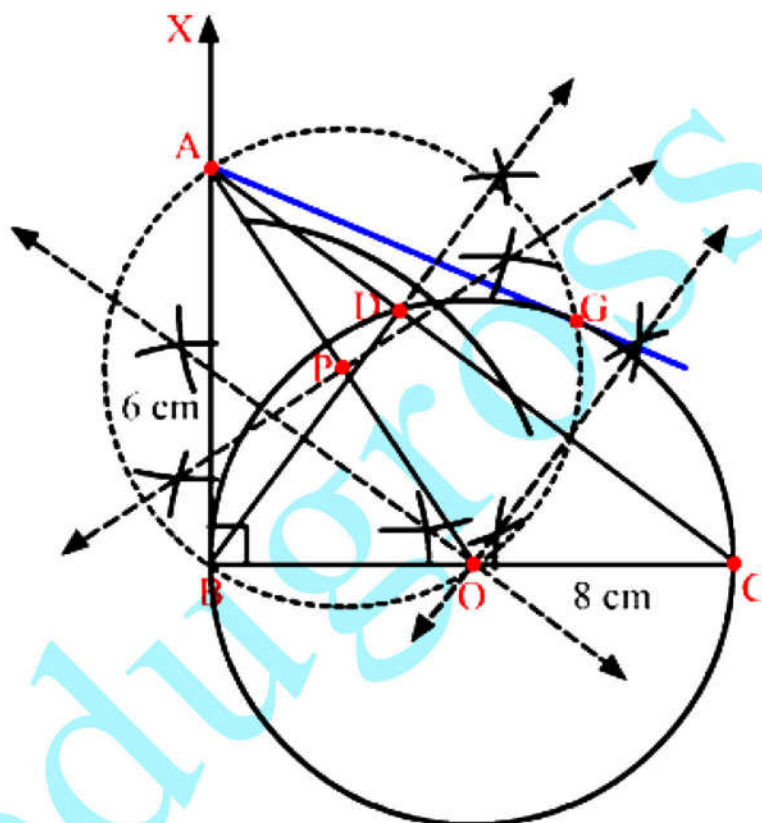
Join A and O and bisect it Let P be the midpoint of AO.

Step 10

Taking P as the centre and PO as its radius, draw a circle which will intersect the circle at point

B and G. Join A and G.

Here, AB and AG are the required tangents to the circle from A.



**Q 18.** The given points are A (0, 2), B (3, p) and C (p, 5).

It is given that A is equidistant from B and C.

$$\therefore AB = AC$$

$$\Rightarrow AB^2 = AC^2$$

$$\Rightarrow (3-0)^2 + (p-2)^2 = (p-0)^2 + (5-2)^2$$

$$\Rightarrow 9+p^2+4-4p=p^2+9$$

$$\Rightarrow 4-4p=0$$

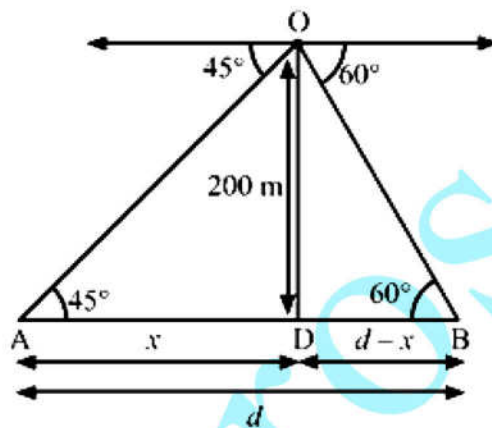
$$\Rightarrow 4p=4$$

$$\Rightarrow p=1$$

Thus, the value of p is 1.

$$\text{Length of AB} = \sqrt{(3-0)^2 + (1-2)^2} = \sqrt{3^2 + (-1)^2} = \sqrt{9+1} = \sqrt{10} \text{ units.}$$

**Q19.** Let d be the distance between the two ships. Suppose the distance of one of the ships from the light house is X meters, then the distance of the other ship from the light house is (d-x) meter.



In right-angled  $\Delta ADO$ , we have.

$$\tan 45^\circ = \frac{OD}{AD} = \frac{200}{x}$$

$$\Rightarrow 1 = \frac{200}{x}$$

$$\Rightarrow x = 200 \dots (1)$$

In right-angled  $\Delta BDO$ , we have

$$\tan 60^\circ = \frac{OD}{BD} = \frac{200}{d-x}$$

$$\Rightarrow \sqrt{3} = \frac{200}{d-x}$$

$$\Rightarrow d-x = \frac{200}{\sqrt{3}}$$

Putting  $x=200$ . We have:

$$d - 200 = \frac{200}{\sqrt{3}}$$

$$d = \frac{200}{\sqrt{3}} + 200$$

$$\Rightarrow d = 200\left(\frac{\sqrt{3}+1}{\sqrt{3}}\right)$$

$$\Rightarrow d = 200 \times 1.58$$

$$\Rightarrow d = 316 \quad (\text{approx.})$$

Thus, the distance between two ships is approximately 316 m.

**Q20.** The given points are A (-2, 1), B (a, b) and C (4-1).

Since the given points are collinear, the area of the triangle ABC is 0.

$$\Rightarrow \frac{1}{2} [x_1(y_2 - y_3) + x_2(y_3 - y_1) + x_3(y_1 - y_2)] = 0$$

Here,  $x_1 = -2, y_1 = 1, x_2 = a, y_2 = b$  and  $x_3 = 4, y_3 = -1$

$$\therefore \frac{1}{2} [-2(b+1) + a(-1-1) + 4(1-b)] = 0$$

$$\Rightarrow -2b - 2 - 2a + 4 - 4b = 0$$

$$\Rightarrow 2a + 6b = 2$$

$$\Rightarrow a + 3b = 1 \quad \dots\dots(1)$$

Given :

$$a - b = 1 \quad \dots\dots(2)$$

Subtracting equation (1) from (2) we get:

$$4b = 0$$

$$\Rightarrow b = 0$$

Substituting  $b = 0$  in (2), we get:

$$a = 1$$

Thus, the values of a and b are 1 and 0, respectively.

**Q21.** It is given that ABC is an equilateral triangle of side 12 cm.

Construction:

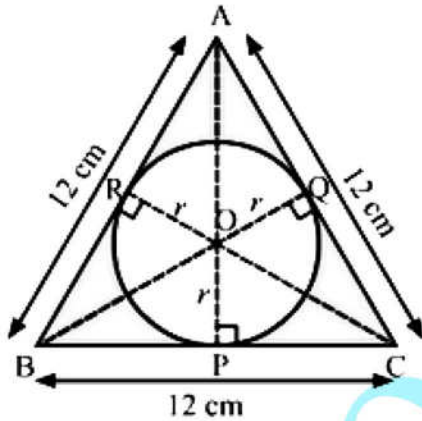
Join OA, OB and OC.

Draw.

$OP \perp BC$

$OQ \perp AC$

$OR \perp AB$



Let the radius of the circle be  $r$  cm.

Area of  $\triangle AOB$  + Area of  $\triangle BOC$  + Area of  $\triangle AOC$  = Area of  $\triangle ABC$

$$\Rightarrow \frac{1}{2} \times AB \times OR + \frac{1}{2} \times BC \times OP + \frac{1}{2} \times AC \times OQ = \frac{\sqrt{3}}{4} \times (\text{Side})^2$$

$$\Rightarrow \frac{1}{2} \times 12 \times r + \frac{1}{2} \times 12 \times r + \frac{1}{2} \times 12 \times r = \frac{\sqrt{3}}{4} \times (12)^2$$

$$\Rightarrow 3 \times \frac{1}{2} \times 12 \times r = \frac{\sqrt{3}}{4} \times 12 \times 12$$

$$\Rightarrow r = 2\sqrt{3} = 2 \times 1.73 = 3.46$$

Therefore the radius of the inscribed circle is 3.46 cm.

Now, area of the shaded region = Area of  $\triangle ABC$  - Area of the inscribed circle

$$= \left[ \frac{\sqrt{3}}{4} \times (12)^2 - \pi (2\sqrt{3})^2 \right] \text{ cm}^2$$

$$= [36\sqrt{3} - 12\pi] \text{ cm}^2$$

$$\begin{aligned}
 &= [36 \times 1.73 - 12 \times 3.14] \text{ cm}^2 \\
 &= [62.28 - 37.68] \text{ cm}^2 \\
 &= 24.6 \text{ cm}^2
 \end{aligned}$$

Therefore, the area of the shaded region is 24.6 cm<sup>2</sup>.

**Q22.** Radius of Semicircle PSR =  $\frac{1}{2} \times 10 \text{ cm} = 5 \text{ cm}$

Radius of Semicircle RTQ =  $\frac{1}{2} \times 3 = 1.5 \text{ cm}$

Radius of semicircle PAQ =  $\frac{1}{2} \times 7 \text{ cm} = 3.5 \text{ cm}$

Perimeter of the shaded region = Circumference of semicircle PSR + Circumference of semicircle RTQ + Circumference of semicircle PAQ

$$\begin{aligned}
 &= \left[ \frac{1}{2} \times 2\pi(5) + \frac{1}{2} \times 2\pi(1.5) + \frac{1}{2} \times 2\pi(3.5) \right] \text{ cm} \\
 &= \pi(5 + 1.5 + 3.5) \text{ cm} \\
 &= 3.14 \times 10 \text{ cm} \\
 &= 31.4 \text{ cm}
 \end{aligned}$$

**Q23.** For the given tank.

Diameter = 10 m

Radius, R = 5m

Depth, H = 2m

Internal radius of the pipe =  $r = \frac{20}{2} \text{ cm} = 10 \text{ cm} = \frac{1}{10} \text{ m}$

Rate of flow of water =  $v = 4 \text{ km/h} = 4000 \text{ m/h}$

Let t be the time taken to fill the tank.

So, the water flow through the pipe in t hours will equal to the volume of the tank

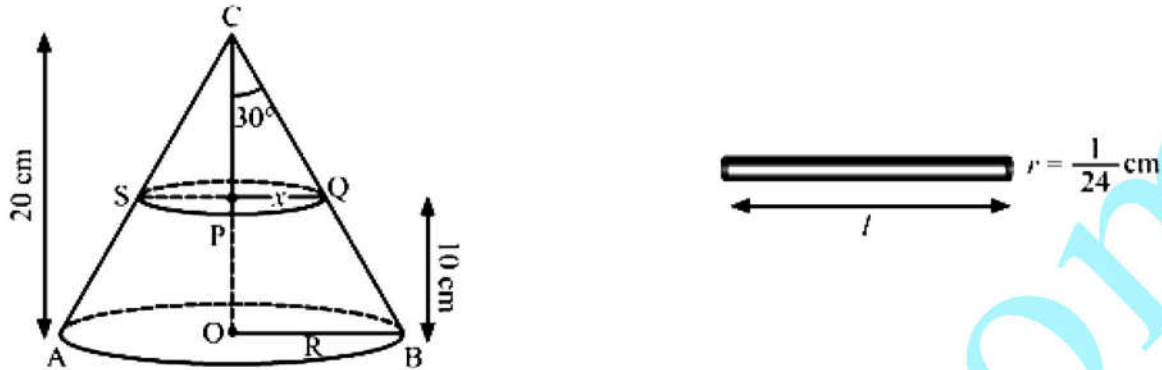
$$\therefore \pi r^2 \times v \times t = \pi R^2 H$$

$$\Rightarrow \left(\frac{1}{10}\right)^2 \times 4000 \times t = (5)^2 \times 2$$

$$\Rightarrow t = \frac{25 \times 2 \times 100}{4000} = 1\frac{1}{4}$$

Hence, the time taken is  $1\frac{1}{4}$  hours.

Q 24.



Let ACB be the cone whose vertical angle  $\angle ACB = 60^\circ$ . Let R and x be the radii of the lower and upper end of the frustum.

Here, height of the cone,  $OC = 20 \text{ cm} = H$

Height  $CP = h = 10 \text{ cm}$

Let us consider P as the mid-Point of OC.

After cutting the cone into two parts through P.

$$OP = \frac{20}{2} = 10 \text{ cm}$$

$$\text{Also, } \angle ACO \text{ and } \angle OCB = \frac{1}{2} \times 60^\circ = 30^\circ$$

After cutting cone CQS from cone CBA, the remaining solid obtained is a frustum.

Now, in triangle CPQ:

$$\tan 30^\circ = \frac{x}{10}$$

$$\Rightarrow \frac{1}{\sqrt{3}} = \frac{x}{10}$$

$$\Rightarrow x = \frac{10}{\sqrt{3}} \text{ cm}$$

In triangle COB:

$$\tan 30^\circ = \frac{R}{CO}$$



$$\Rightarrow \frac{1}{\sqrt{3}} = \frac{R}{20}$$

$$\Rightarrow R = \frac{20}{\sqrt{3}} \text{ cm}$$

Volume of the frustum,  $V = \frac{1}{3} \pi (R^2H - x^2h)$

$$\Rightarrow V = \frac{1}{3} \pi \left( \left( \frac{20}{\sqrt{3}} \right)^2 \cdot 20 - \left( \frac{10}{\sqrt{3}} \right)^2 \cdot 10 \right)$$

$$= \frac{1}{3} \pi \left( \frac{8000}{3} - \frac{1000}{3} \right)$$

$$= \frac{1}{3} \pi \left( \frac{7000}{3} \right)$$

$$= \frac{1}{9} \pi \times 7000$$

$$= \frac{7000}{9} \pi$$

The volumes of the frustum and the wire formed are equal.

$$\pi \times \left( \frac{1}{24} \right)^2 \times l = \frac{7000}{9} \pi \quad [\text{Volume of wire} = \pi r^2 h]$$

$$\Rightarrow l = \frac{7000}{9} \times 24 \times 24$$

$$\Rightarrow l = 448000 \text{ cm} = 4480 \text{ m}$$

Hence, the length of the wire is 4480 m.

**Q25.** Let the two natural numbers be X and Y such that  $x > y$ .

Given:

Difference between the natural numbers = 5

$$\therefore X - Y = 5 \quad \dots(1)$$

Difference of their reciprocals =  $\frac{1}{10}$  (given)

$$\frac{1}{y} - \frac{1}{x} = \frac{1}{10}$$

$$\Rightarrow \frac{x-y}{xy} = \frac{1}{10}$$

$$\Rightarrow \frac{5}{xy} = \frac{1}{10}$$

$$\Rightarrow xy = 50 \quad \dots \text{(ii)}$$

Putting the value of x from equation (i) in equation (ii), we get

$$(y+5)y = 50$$

$$\Rightarrow y^2 + 5y - 50 = 0$$

$$\Rightarrow y^2 + 10y - 5y - 50 = 0$$

$$\Rightarrow y(y+10) - 5(y+10) = 0$$

$$\Rightarrow (y-5)(y+10) = 0$$

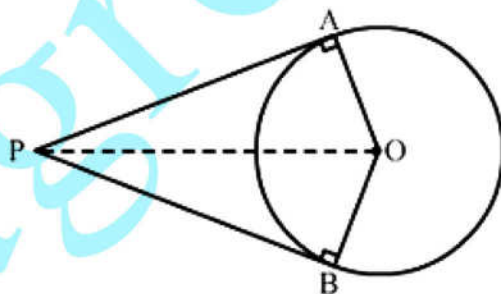
$$\Rightarrow y = 5 \text{ or } -10$$

As y is a natural number, therefore  $y = 5$

Other natural number =  $y + 5 = 5 + 5 = 10$

Thus, the two natural numbers are 5 and 10.

**Q26.** Let AP and BP be the two tangents to the circle with centre O.



To Prove :  $AP = BP$

Proof:

In  $\triangle AOP$  and  $\triangle BOP$

$OA = OB$  (radii of the same circle)

$\angle OAP = \angle OBP = 90^\circ$  (since tangent at any point of a circle is perpendicular to the radius through the point of contact)

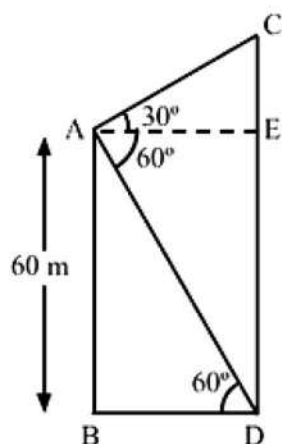
$$OP = OP \quad (\text{common})$$

$$\therefore \Delta AOP \cong \Delta OBP \quad (\text{by R.H.S. congruence criterion})$$

$$\therefore AP = BP \quad (\text{corresponding parts of congruent triangles})$$

Hence the length of the tangents drawn from an external point to a circle are equal.

**Q27.** Let AB be the building and CD be the tower.



In right  $\Delta ABD$ .

$$\frac{AB}{BD} = \tan 60^\circ$$

$$\Rightarrow \frac{60}{BD} = \sqrt{3}$$

$$\Rightarrow BD = \frac{60}{\sqrt{3}}$$

$$\Rightarrow BD = 20\sqrt{3}$$

In right  $\Delta ACE$ :

$$\frac{CE}{AE} = \tan 30^\circ$$

$$\Rightarrow \frac{CE}{BD} = \frac{1}{\sqrt{3}} \quad (\because AE = BD)$$

$$\Rightarrow CE = \frac{20\sqrt{3}}{\sqrt{3}} = 20$$

$$\text{Height of the tower} = CE + ED = CE + AB = 20 \text{ m} + 60 \text{ m} = 80 \text{ m}$$

Difference between the heights of the tower and the building =  $80 \text{ m} - 60 \text{ m} = 20 \text{ m}$

Distance between the tower and the building =  $BD = 20\sqrt{3} \text{ m}$ .

**Q28.** Total number of cards = 49

(1)

Total number of outcomes = 49

The odd numbers from 1 to 49 are 1, 3, 5, 7, 9, 11, 13, 15, 17, 19, 21, 23, 25, 27, 29, 31, 33, 35, 37, 39, 41, 43, 45, 47 and 49.

Total number of favourable outcomes = 25

$$\therefore \text{Required probability} = \frac{\text{Total number of favourable outcomes}}{\text{Total number of outcomes}} = \frac{25}{49}$$

(ii)

Total number of outcomes = 49

The numbers 5, 10, 15, 20, 25, 30, 35, 40 and 45 are multiples of 5.

The number of favourable outcomes = 9

$$\therefore \text{Required probability} = \frac{\text{Total number of favourable outcomes}}{\text{Total number of outcomes}} = \frac{9}{49}$$

(iii) Total number of outcomes = 49

The numbers 1, 4, 9, 16, 25, 36 and 49 are perfect squares.

Total number of favourable outcomes = 7

$$\therefore \text{Required probability} = \frac{\text{Total number of favourable outcomes}}{\text{Total number of outcomes}} = \frac{7}{49} = \frac{1}{7}$$

(iv)

Total number of outcomes = 49

We know that there is only one even prime number which is 2

Total number of favourable outcomes = 1

$$\therefore \text{Required probability} = \frac{\text{Total number of favourable outcomes}}{\text{Total number of outcomes}} = \frac{1}{49}$$

**Q29.** Let the Point P (x, 2) divide the line segment joining the points A (12, 5) and B (4, -3) in the ratio k: 1

Then, the coordinates of P are  $(\frac{4k+12}{k+1}, \frac{-3k+5}{k+1})$

Now, the coordinates of P are (x,2)

$$\therefore \frac{4k+12}{k+1} = x \text{ and } \frac{-3k+5}{k+1} = 2$$

$$\frac{-3k+5}{k+1} = 2$$

$$\Rightarrow -3k + 5 = 2k + 2$$

$$\Rightarrow 5k = 3$$

$$\Rightarrow k = \frac{3}{5}$$

Substituting  $k = \frac{3}{5}$  in  $\frac{4k+12}{k+1} = x$ , we get

$$X = \frac{4 \times \frac{3}{5} + 12}{\frac{3}{5} + 1}$$

$$\Rightarrow X = \frac{12+60}{3+5}$$

$$\Rightarrow X = \frac{72}{8}$$

$$\Rightarrow X = 9$$

Thus, the value of x is 9

Also, the point P divides the line segment joining the points A (12, 5) and (4, -3) in the ratio  $\frac{3}{5}: 1$ , i.e. 3:5.

**Q30.** Given quadratic equation:

$$(k+4)x^2 + (k+1)x + 1 = 0$$

Since the given quadratic equation has equal roots, Its discriminant should be zero.

$$\therefore D = 0$$

$$\Rightarrow (k+1)^2 - 4 \times (k+4) \times 1 = 0$$

$$\Rightarrow k^2 + 2k + 1 - 4k - 16 = 0$$

$$\Rightarrow k^2 - 2k - 15 = 0$$

$$\Rightarrow k^2 - 5k + 3k - 15 = 0$$

$$\Rightarrow (k-5)(k+3) = 0$$

$$\Rightarrow k-5 = 0 \text{ or } k+3 = 0$$

$$\Rightarrow k = 5 \text{ or } -3$$

Thus, the values of k are 5 and -3

For k = 5

$$(k+4)x^2 + (k+1)x + 1 = 0$$

$$\Rightarrow 9x^2 + 6x + 1 = 0$$

$$\Rightarrow (3x)^2 + 2(3x) + 1 = 0$$

$$\Rightarrow (3x+1)^2 = 0$$

$$\Rightarrow x = -\frac{1}{3}, -\frac{1}{3}$$

For k = -3

$$(k+4)x^2 + (k+1)x + 1 = 0$$

$$\Rightarrow x^2 - 2x + 1 = 0$$

$$\Rightarrow (x-1)^2 = 0$$

$$\Rightarrow x = 1, 1$$

Thus, the equal root of the given quadratic equation is either 1 or  $-\frac{1}{3}$ .

**Q31** Let a and d be the first term and the common difference of an A. P. respectively.

$n^{\text{th}}$  term of an A. P,  $a_n = a + (n-1)d$

Sum of n terms of an A. P,  $S_n = \frac{n}{2}[2a+(n-1)d]$

We have:

$$\text{Sum of the first 10 terms} = \frac{10}{2}[2a + 9d]$$

$$\Rightarrow 210 = 5[2a+9d]$$

$$\Rightarrow 42 = 2a+9d \quad \dots\dots\dots (1)$$

15<sup>th</sup> term from the last =  $(50 - 15 + 1)^{\text{th}} = 36^{\text{th}}$  term from the beginning

Now,  $a_{36} = a + 35d$

$$\begin{aligned} \therefore \text{Sum of the last 15 terms} &= \frac{15}{2}(2a_{36} + (15 - 1)d) \\ &= \frac{15}{2}[2(a + 35d) + 14d] \\ &= 15[a + 35d + 7d] \end{aligned}$$

$$\Rightarrow 2565 = 15[a + 42d]$$

$$\Rightarrow 171 = a + 42d \quad \dots\dots\dots(2)$$

From (1) and (2), we get,

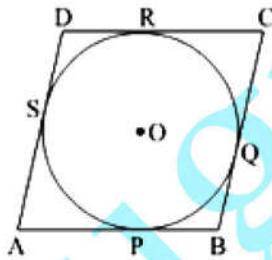
$$d = 4$$

$$a = 3$$

So, the A. P. formed is 3, 7, 11, 15 .... and 199.

**Q32** Given ABCD be a parallelogram circumscribing a circle with centre O.

To Prove: ABCD is a rhombus.



We know that the tangents drawn to a circle from an exterior point are equal in length.

$$\therefore AP = AS, BP = BQ, CR = CQ \text{ AND } DR = DS.$$

$$AP + BP + CR + DR = AS + BQ + CQ + DS$$

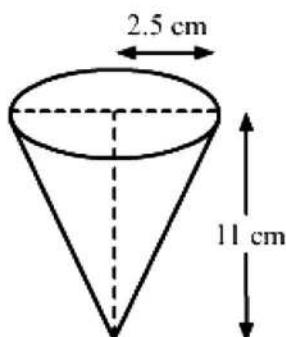
$$(AP + BP) + (CR + DR) = (AS + DS) + BQ + CQ$$

$$\therefore AB + CD = AD + BC \text{ OR } 2AB = 2BC \quad (\text{since } AB = DC \text{ and } AD = BC)$$

$$\therefore AB = BC = DC = AD$$

Therefore, ABCD is a rhombus.

Q33.



Height ( $h$ ) of the conical vessel = 11 cm

Radius ( $r_1$ ) of the conical Vessel = 2.5 cm

Radius ( $r_2$ ) of the metallic spherical balls =  $\frac{0.5}{2} = 0.25$  cm

Let  $n$  be the number of spherical balls that were dropped in the vessel.

Volume of the water spilled = Volume of the spherical balls dropped

$\frac{2}{5} \times \text{Volume of cone} = n \times \text{Volume of one spherical ball}$

$$\Rightarrow \frac{2}{5} \times \frac{1}{3} \pi r_1^2 h = n \times \frac{4}{3} \pi r_2^3$$

$$\Rightarrow r_1^2 h = n \times 10 r_2^3$$

$$\Rightarrow (2.5)^2 \times 11 = n \times 10 \times (0.25)^3$$

$$\Rightarrow 68.75 = 0.15625n$$

$$\Rightarrow n = 440$$

Hence, the number of spherical balls that were dropped in the vessel is 440.

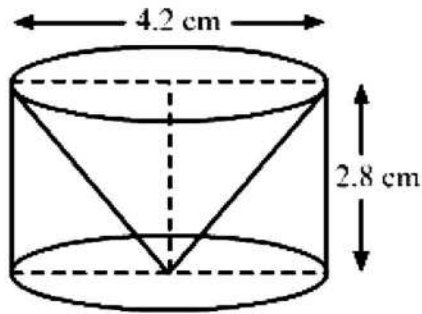
Sushant made the arrangement so that the water that flows out, irrigates the flower beds.

This shows the judicious usage of water.

Q34.

The following figure shows the required cylinder and the conical cavity.





Given

Height (b) of the conical Part = Height (h) of the cylindrical part = 2.8 cm

Diameter of the cylindrical part = Diameter of the conical part = 4.2 cm

∴ Radius <sup>®</sup> of the cylindrical part = Radius <sup>®</sup> of the conical part = 2.1 cm

Slant height (l) of the conical part =  $\sqrt{r^2 + h^2}$

$$= \sqrt{(2.1)^2 + (2.8)^2} \text{ cm}$$

$$= \sqrt{4.41 + 7.81} \text{ cm}$$

$$= \sqrt{12.25} \text{ cm}$$

$$= 3.5 \text{ cm}$$

Total surface area of the remaining solid = Curved surface area of the cylindrical part + Curved surface area of the conical part + Area of the cylindrical base

$$= 2\pi rh + \pi rl + \pi r^2$$

$$= \left( 2 \times \frac{22}{7} \times 2.1 \times 2.8 + \frac{22}{7} \times 2.1 \times 3.5 + \frac{22}{7} \times 2.1 \times 2.1 \right) \text{ cm}^2$$

$$= (36.96 + 23.1 + 13.86) \text{ cm}^2$$

$$= 73.92 \text{ cm}^2$$

Thus, the total surface area of the remaining solid is 73.92 cm<sup>2</sup>