






# NCERT Solutions For Class 2 Maths Chapter 12

## Give and Take

Kinnaree sells  beads in the bazar. She sells loose  beads and  necklaces of 10 beads each.

Razia wants 12 beads. So Kinnaree gives her one  necklace and two  loose beads.













### Question: 1

Now you may find how many necklaces and loose beads the other children take.

	Beads	Necklace of 10 beads	Loose beads
Razia	12		
Reema	17		
Aarif	24		
Sonu	35		
Simar	31		



**Answer:**

	Beads	Necklace of 10 beads	Loose beads
Razia	12		
Reema	17		
Aarif	24		
Sonu	35		
Simar	31		

**Question: 2**

How many beads are taken by Razia and Reema together? **Answer:**



		
	1	2
+	1	7
	2	9

Razia and Reema have taken 29 beads together.

**Question: 3**

How many beads are taken by Razia and Sonu?



\_\_\_\_\_ beads are taken by Razia and Sonu.

Answer:



	1	2
+	3	5
	4	7

47 beads are taken by Razia and Sonu.

**Add by writing and also without writing**

**Question: 4**

**How many beads do they have together?**

A)

Reema		
	1	7
Sonu +	3	5

\_\_\_\_\_ beads

B)

Aarif		
	2	4
Razia +	1	2

\_\_\_\_\_ beads

Answer:

A)

Reema		
	1	7
Sonu +	3	5
	5	2

\_\_\_\_\_ beads

B)

Aarif		
	2	4
Razia +	1	2
	3	6

\_\_\_\_\_ beads

### How Many More Beads?

#### Question: 5

How many more beads do they have in the following?

A)

Sonu		
Aarif	— 	

Sonu has \_\_\_\_\_ more beads than Aarif.

B)

Aarif		
Razia	— 	

Aarif has \_\_\_\_\_ more beads than Razia.



Answer:

A)

Sonu		
Aarif	— 	
		

Sonu has 11 more beads than Aarif.





B)


Aarif		
Razia	— 	
		

Aarif has 12 more beads than Razia.

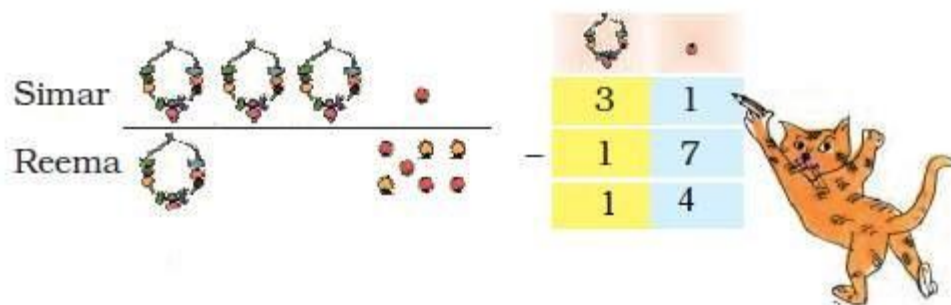
#### Question: 6

C) How many more beads does Simar have than Reema?

Simar		
Reema	— 	



**Answer:**



Simar has 14 more beads than Reema.

**Practice Time: Also do it in your mind**

**Question: 7**

Tanisha has 17 pencils. Siya has 25 pencils. How many pencils are there in all?

Tanisha	1	7
Siya	2	5

**Answer:**

Tanisha	1	7
Siya	2	5
	4	2

There are 42 pencils in all.

**Question: 8**

In Muneeza's class, there are 13 English story books and 22 Hindi story books. How many story books are there in all?

$$\begin{array}{r} 13 \\ + 22 \\ \hline \end{array}$$

**Answer:**

$$\begin{array}{r} 13 \\ + 22 \\ \hline 35 \end{array}$$

There are 35 story books in all.

**Question: 9**

Sakshi had 23 fruits. She ate 15 fruits. How many fruits are left?

$$\begin{array}{r} 23 \\ - 15 \\ \hline \end{array}$$

**Answer:**

$$\begin{array}{r} 23 \\ - 15 \\ \hline 08 \end{array}$$

8 fruits are left.

**Question: 10**

Daljeet has 35 marbles. Arvind has 25 marbles. How many marbles do they have in all?

	3	5
+	2	5

**Answer:**

	3	5
+	2	5
	6	0

There are 60 marbles.

**Question: 11**

Nisha has 32 bangles. Sukhi has 16 bangles. How many more bangles does Nisha have?

	3	2
-	1	6

**Answer:**

	3	2
-	1	6
	1	6

Nisha has 16 bangles.

## Venkatesha's Canteen

### Question: 12

Help Venkatesha to make the bills.




	Rupees
Dosa	2 3
Uthappam	2 8
Total	

	Rupees
Idli	1 5
Coffee	8
Total	

	Rupees
Dahi Vada	2 5
Chilli Rice	1 8
Total	

	Rupees
Soup	2 7
Noodles	1 5
Total	

Answer:




	Rupees
Dosa	2 3
Uthappam	2 8
Total	5 1

	Rupees
Idli	1 5
Coffee	8
Total	2 3

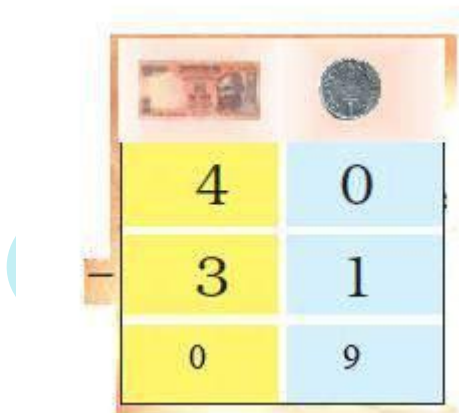
	Rupees
Dahi Vada	2 5
Chilli Rice	1 8
Total	4 3

	Rupees
Soup	2 7
Noodles	1 5
Total	4 2

## Question: 13



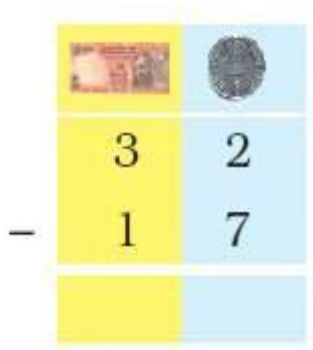
Answer:





I will get back 9 rupees.

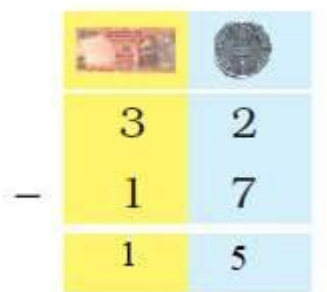
**Question: 14**



Shekhar has 32 rupees. He bought a ball for 17 rupees. How much money is left with him?



		
	3	2
–	1	7

**Answer:**

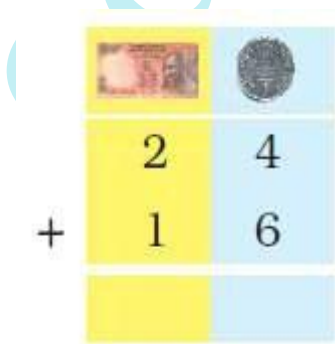




		
	3	2
–	1	7
	1	5

15 rupees is left with Shekhar.

**Question: 15**

Soni bought biscuits for 24 rupees and a packet of chips for 16 rupees. How much money will she pay?



		
	2	4
+	1	6



**Answer:**

		
	2	4
+	1	6
	4	0



Soni pays 40 rupees.

**Question: 16**

Fantoosh had 64 rupees. He spent 39 rupees at the fair. How much money is left with him?

		
	6	4
-	3	9

**Answer:**

		
	6	4
-	3	9
	2	5

25 rupees is left with Fantoosh.