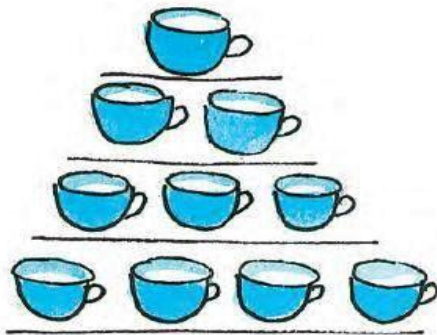


**Question: 1**

Can you guess how many cups?

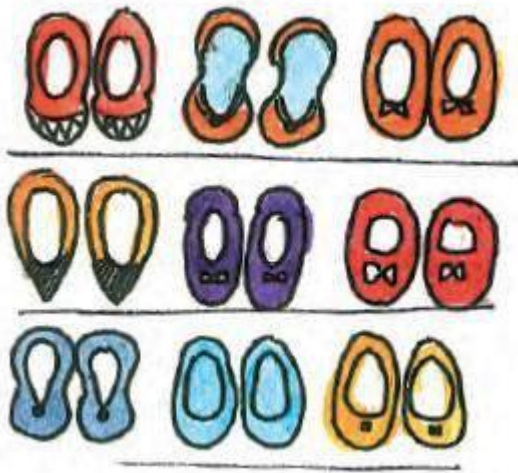
**Answer:**

$$1 + 2 + 3 + 4 = 10 \text{ cups}$$

There are 10 cups

**Question: 2**

Can you guess how many pairs of shoes?

**Answer:**

There are 3 pairs in each line

$$3 + 3 + 3 = 9 \text{ pairs}$$

There are 9 pairs of shoes

**Question: 3**

Look at how different things are kept in groups. Try to guess the total number without counting each thing.

(a)



**Answer:** There are 12  
glasses

(b)

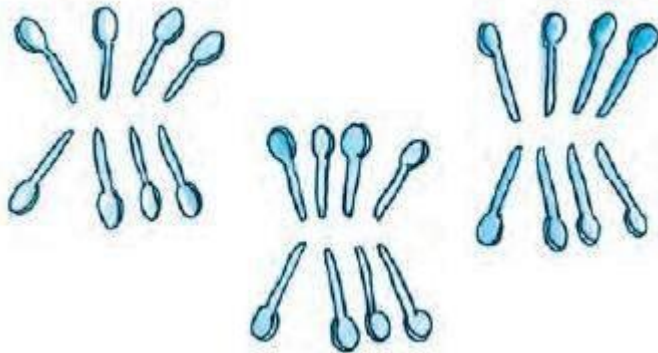


**Answer:**  
There are 25 bangles.

(c)

**Answer:**

(c) There are 12 pairs of earrings.

**Question: 4****There are three groups of spoons****(a) How many in each group?****Answer:**

There are 8 spoons in each group

**(b) Guess the total number of spoons Answer:**

There are 24 spoons

**Question: 5**

**Ring the correct answer**

**(a) Number of teeth in your mouth**



**More than 40**

**Less than 40**

**Answer:** Less than  
40

**(b) Number of seeds in an orange**



**More than 50**

**Less than 50**

**Answer:** Less  
than 50

**(c) Number of matchsticks in a matchbox**



**More than 30**

**Less than 30**

**Answer:**  
More than 30

(d) Number of pencils in your class



More than 45 Less  
than 45 Answer:

Less than 45

(e) Number of spokes in one cycle wheel



More than 20 Less  
than 20 Answer:

(e) Less than 20

Join the dots


**Question: 6**

Jojo doggy is hungry. Join the dots in order, from 21 to 52, and find out what is hidden for him to eat

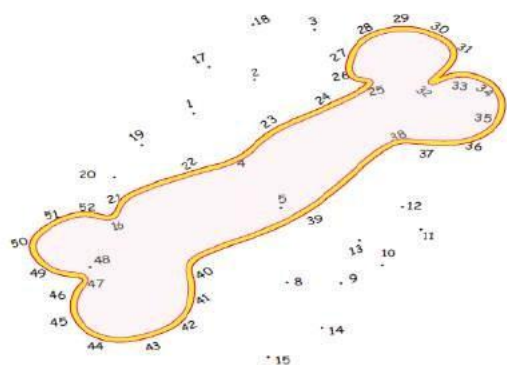


# NCERT Solutions For Class 2 Maths Chapter 2

## Counting in Groups



**Answer:**




Bone

**Question: 7**

**Bhurru has torn some pages of this book**



Write the page numbers in the correct order Answer:



Question: 8

Puzzling tail




Chipku rat has a long tail.

When he was sleeping, naughty cat thought of tying his tail to the poles. She started from the pole with the biggest number. She moved on to the smaller numbers in order.

Help her in tying. But the tail should not cross itself anywhere.

Answer:



**Question: 9**

Look at the picture and and write



(a) How many are pulling the carrot out? Answer:

6

(b) Who was the first one to pull it?

Answer:

Old man

(c) The cat is in the \_\_\_\_\_ line Answer:

Fifth

(d) Who was the fourth one to pull the carrot? \_\_\_\_\_

Answer: The dog

(e) How many were pulling the carrot before the cat came to help them? Answer:

4



**Question: 10** Seema's  
century

Seema has made a design with different bindis.



(a) Look at the groups and guess the total number of bindis.

**Answer:**

80 bindis

(b) Draw more groups to complete 100 bindis. How many more bindis did you have to draw?

**Answer:**

20 bindis