

NCERT Solutions For Class 2 Maths Chapter 3

How Much Can You Carry

The Clever Donkey and His Heavy Sack

Sandesh has a



donkey. It carries a



sacks full of salt on its back.

On the way to the market they have to cross a



river. One day, while the

crossing the



river, the



donkey slipped and fell into the



river.

When it got up, the



sacks felt very light.

Question: 1

Guess why the



sacks felt lighter? **Answer:**

The donkey was very happy. This also gave an idea. Next

day the clever donkey decided to take dip in



river. Sandesh

understood the

donkey's trick and he placed wollen cloth instead of salt in



sacks.



Question: 2

Now, what would happen to the
Why?



donkey when it dipped into the river?

Answer:

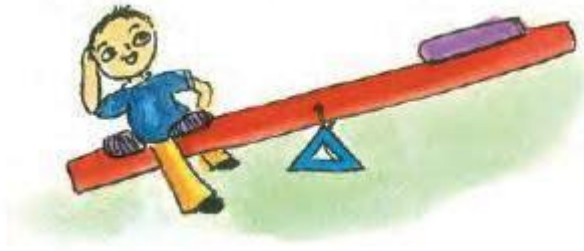
After the donkey dips in a river. The sacks of wollen cloth become heavy on absorbing water. So, the donkey felt heavier.

NCERT Solutions For Class 2 Maths Chapter 3


How Much Can You Carry

Raju wants to Ride a See-saw

Raju needs a friend to ride a see-saw



Rani comes to help Raju



But still Raju cannot ride it

Question: 3

Can you tell why? Circle the correct answer Answer:

Raju is heavier or lighter than Rani

Aslam comes to help them

Look at the picture



NCERT Solutions For Class 2 Maths Chapter 3 How Much Can You Carry

Question: 4


Can you tell why the see-saw turned this way?

Answer:

Raju is heavier or lighter than both Rani and Aslam



I have an idea. Let me keep my bag with me.



We are all enjoying the ride

Heavier or Lighter

Which of the two thins will make the see-saw go down? Look at the example.



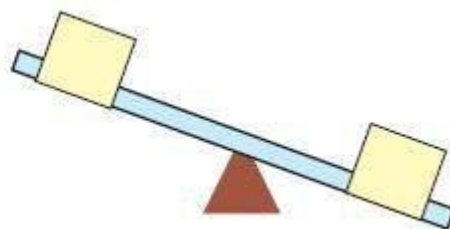
NCERT Solutions For Class 2 Maths Chapter 3 How Much Can You Carry

Question: 5

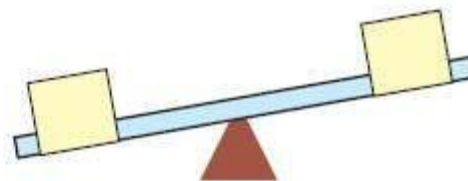
Draw a line to match the heavier one.

Answer:

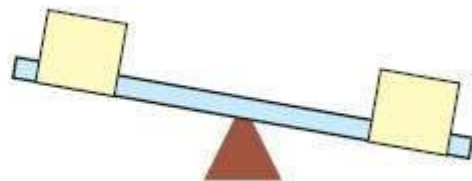
(a)



(b)



(c)



Question: 6

Colour the one which is lighter?

Chhotu Monkey and the Carrots

Question: 7

Guess and tell what Chhotu monkey used to help Chikky and Micky. Draw a picture of it in the monkeys hand.

Answer:

Chhotu monkey used a beam balance to help Chikky and Micky

NCERT Solutions For Class 2 Maths Chapter 3

How Much Can You Carry



Find out?

Question: 8

Your parents buy carrots for the family. How much do they buy at one time?

Answer:

2 kg

Question: 9

How does the vegetable seller weigh the carrots?

Answer:

By using beam balance

How Much Can Simran Carry?

Question: 10

Guess which bags Simran can carry.

Answer:

1 kg Salt and 1 kg Ghee

Question: 11

Guess who can carry what (a) Her father?

Answer:

Cooking oil and Atta (b) Her

mother?

Answer:

5 kg Rice

(c) Her younger sister?

Answer:

A packet of biscuits.

NCERT Solutions For Class 2 Maths Chapter 3

How Much Can You Carry

Question: 12

Can Simran carry any two of these bags together? If yes, which ones?

Answer:

Yes, packets of oil and ghee

Question: 13

Which bags can you carry? Guess.

Answer:

2 kg dal

Question: 14

Match the picture of the animal with the thing it can carry.



Answer:

